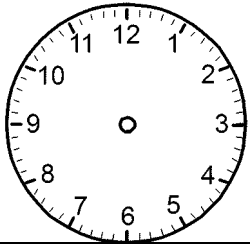


Time: 40 Minutes	Paper Math 2	Total Marks: 25
-------------------------	---------------------	------------------------

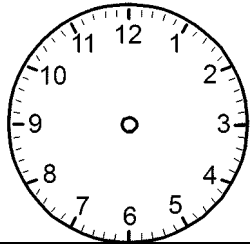
5th Month, 4th Week, 3rd Day	Syllabus: Review Exercise. Q # 3.
------------------------------	--

Q.1. Draw the hands of each clock according to the given time. (10)

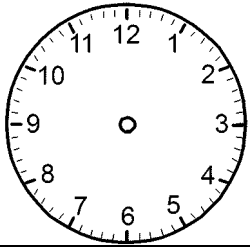
دیئے ہوئے وقت کے مطابق گھڑیوں میں سوئیاں لگائیں۔



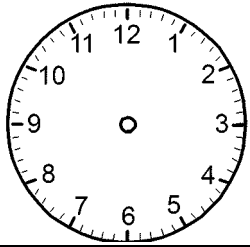
3 : 40



8 : 50



10 : 10



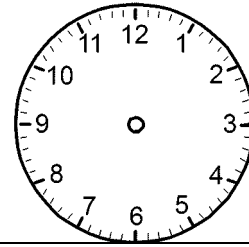
2 : 20

Time: 40 Minutes	Paper Math 2	Total Marks: 25
-------------------------	---------------------	------------------------

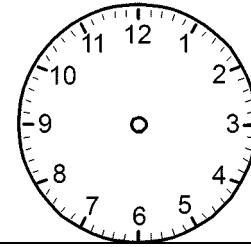
5th Month, 4th Week, 3rd Day	Syllabus: Review Exercise. Q # 3.
------------------------------	--

Q.1. Draw the hands of each clock according to the given time. (10)

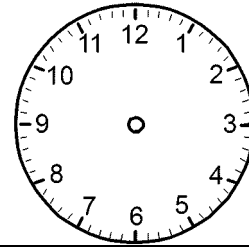
دیئے ہوئے وقت کے مطابق گھڑیوں میں سوئیاں لگائیں۔



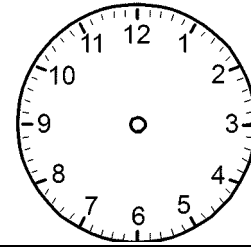
3 : 40



8 : 50



10 : 10



2 : 20
